

Trivia #1

Handwritten initials

Name _____

What is the world's largest animal? To figure out what kind of animal this is, solve each of the multiplication problems below. Write the letter that corresponds to the answer on the line in front of each problem. The letters will spell out the answer to the trivia question.

 A $0.7 \times 0.4 =$ 0.28

 $0.2 \times 0.3 =$

 $0.9 \times 0.4 =$

 $1.2 \times 0.6 =$

 $4.3 \times 0.09 =$

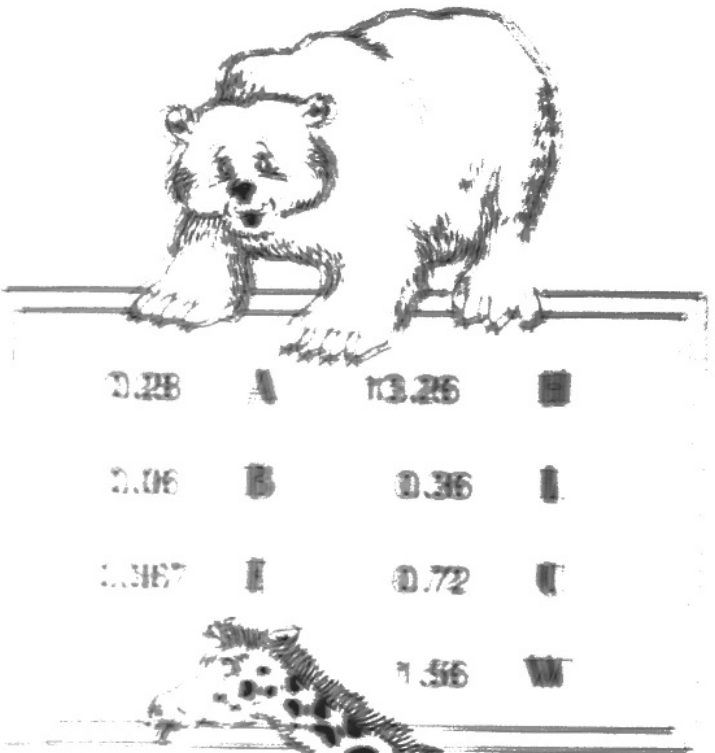
 $1.2 \times 1.3 =$

 $5.1 \times 2.6 =$



 $1.4 \times 0.2 =$

 $0.6 \times 0.6 =$

 $1.29 \times 0.3 =$



0.28	A	13.26	■
0.06	B	0.36	I
1.367	I	0.72	U
		1.56	W



Copyright © 1998 by The McGraw-Hill Companies, Inc.