


# Why Did The Coffee Taste Like Mud?

For each exercise, circle the best estimate. Write the letter next to your answer in the box containing the exercise number.

I. Circle the percent that tells about how much of the bar is shaded.




(H) 15%    (U) 40%



(R) 80%    (I) 60%




(T) 25%    (M) 38%



(S) 67%    (P) 52%




(L) 24%    (D) 10%



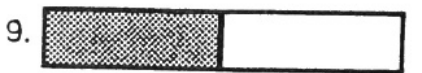
(A) 90%    (I) 75%



(V) 46%    (O) 33%



(F) 60%    (T) 75%



(U) 50%    (R) 5%

II. The circle graphs show the results of a student poll.  
Circle the best estimate for the percent described.

10. About what percent chose rock music?

(P) 75%    (S) 55%    (L) 40%

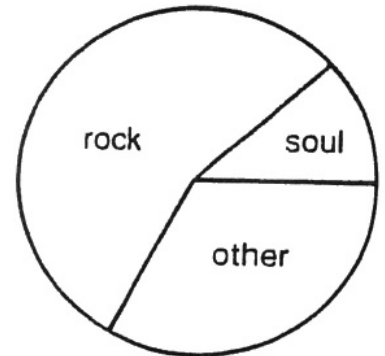
11. About what percent chose soul music?

(W) 12%    (F) 2%    (H) 23%

12. About what percent chose other kinds of music?

(L) 46%    (G) 33%    (T) 67%

Favorite Kind of Music



13. About what percent chose hot dogs?

(C) 38%    (H) 15%    (J) 25%

14. About what percent chose pizza?

(S) 60%    (L) 50%    (N) 45%

15. About what percent chose chicken?

(R) 15%    (E) 26%    (A) 4%

Favorite School Lunch



2	8		11	6	4		13	1	10	3		12	15	7	9	14	5
---	---	--	----	---	---	--	----	---	----	---	--	----	----	---	---	----	---