

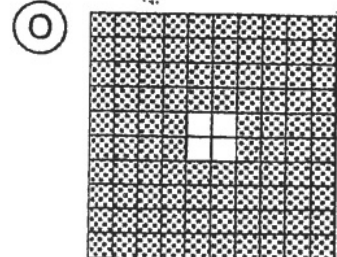
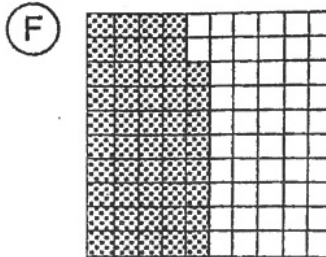
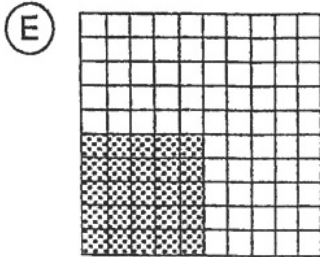
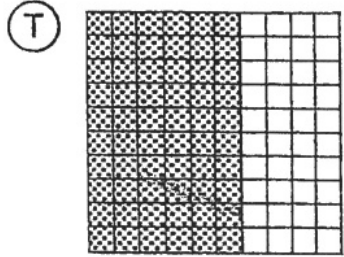
# What Do Centipedes Hate To Do?

AW

Each exercise and find your answer at the bottom of the page. Write the letter of the exercise in the box containing the answer.




I. Write a percent for the amount shaded.



II. Write a percent for each group of circles.

(A) the shaded circles

(E) the unshaded circles



III. Write a percent for each ratio.

(S) 1 to 100

(N) 83 to 100

(O) 54 : 100

(T) 2 : 10

(W)  $\frac{75}{100}$

(H)  $\frac{24}{100}$

(O)  $\frac{8}{10}$

(F)  $\frac{5}{10}$

(H) 0.62

(O) 0.98

(Y) 0.4

(R) 0.1

(T) 0.03

(G) 0.86

(A) 0.07

(T) 1.0

IV. Solve.

(D) There are 100 centimeters in a meter. What percent of a meter is 30 cm?

(T) There are 100 cents in a dollar. What percent of a dollar is \$0.15?

(O) Of the 100 million acres in California, the federal government owns 45 million acres. What percent is this?

(N) Gulliver tossed a coin 100 times and got 43 heads. What percent of the tosses were *tails*?

(F) Of 100 students surveyed, 90 chose math as their favorite subject. What percent chose math?

(R) A sheet of 100 stamps has 22 stamps left. What percent of the stamps has already been used?

1%	3%	7%	10%	15%	18%	20%	24%	25%	29%	30%	33%	40%	42%	45%	48%	50%
54%	57%	59%	60%	62%	67%	71%	75%	78%	80%	83%	86%	88%	90%	96%	98%	100%