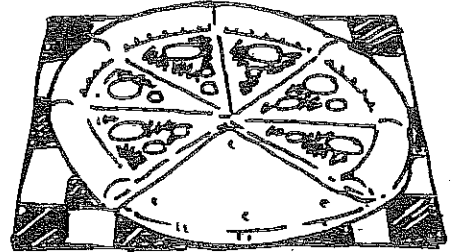


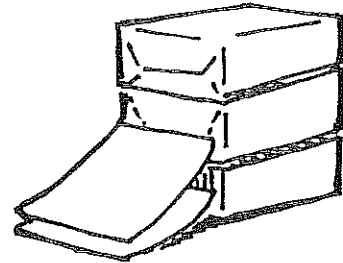
HW

More Decimals

- A. For Pat's birthday he invited 2 friends over to watch movies. They ordered pizza and ate 0.33 of it. After the movie, the friends were talking and ate another 0.25 of the pizza. How much will be left for Pat's family to have for lunch the next day?



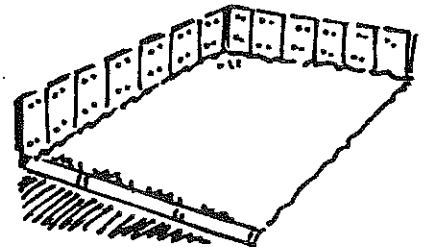
- B. The school secretary was making copies of flyers to send home with all the students in the school. She used 1.33 packs of paper in the morning. She then used another 3.4 packs of paper in the afternoon. If she had 7 packs of paper when she began, how many are left?



- C. Nick was cleaning up after the PTA meeting. He collected all the opened and unopened juice bottles. There were 1.2 bottles of apple juice, 2 bottles of grape juice, 1.7 bottles of cranberry juice, and 0.3 bottle of fruit punch. How much drink was left after the meeting?




- D. Kara's family is looking for a lot to build a new house. They looked at 5 lots and are trying to find the largest one. The lots are 1.74 acres, 1.705 acres, 1.07 acres, 1.75 acres, and 1.3 acres. Put the lots in order from smallest to largest.




Cameron's Day

- A. For breakfast, Cameron drank 0.45 cup of water and 0.84 cup of orange juice. If he needs to drink 2 cups of fluid for breakfast, how much more does he need to drink?



- B. On the bus ride home from school, Cameron read 0.25 of his history chapter. That afternoon he read another 0.33 of the chapter. While waiting for dinner he read another 0.145 of the chapter. How much does he have left to read after dinner?



- C. Cameron weighed all the animals in his toy animal collection. The table below shows the weights. Put them in order from greatest to least weight.

Animal	Weight
Fox	.75 g
Beaver	1.2 g
Deer	1.34 g
Alligator	.83 g
Buffalo	.98 g

- D. Cameron and his dad have been working on building a model train layout. The first month they put down 3.2 feet of track. The second month they removed 1.15 feet of track and then put down 1.4 feet of track. The third month they removed 2 feet of track and then finished the tracks by adding an additional 5.7 feet of track. How long was the completed track?